



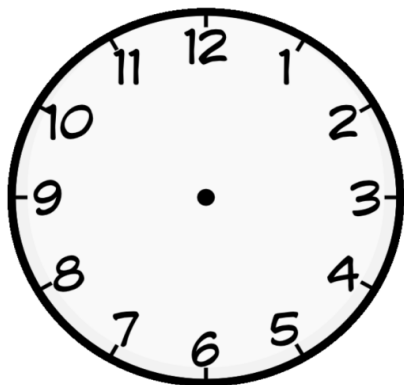
## MATHEMATICS WORKSHEET

### BASIC GEOMETRICAL IDEAS - 1


**DO AS DIRECTED :**

Draw and mention the angle between the hour and minute hand of a clock of the given time.

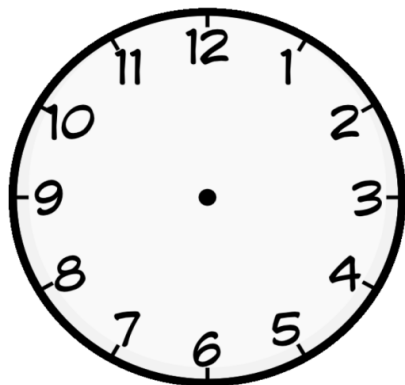
(a) 3:30



(c) 12:00



(b) 9:00 (reflex angle)



(d) 8:30

