



SMILES N SKILLS



MATHEMATICS WORKSHEET





DATA HANDLING

1. In a bird sanctuary, the following species of birds were recorded in the year 2009.

Where  count = 125 birds.

Observe the pictograph and answer the following questions on a separate sheet of paper.

- (a) Which bird is likely to become extinct soon?
- (b) Which bird has the highest population?
- (c) What is the total count of wagtails and parakeets in the sanctuary?
- (d) Which bird's population is greater than the wagtails?
- (e) What is the total number of birds found in the bird sanctuary?

Crane	
Pelican	
Parakeet	
Hawk	
Wagtail	