



# SMILES N SKILLS




## MATHEMATICS WORKSHEET


### MEASUREMENT

WRITE THE MEASUREMENT UNIT OF THE FOLLOWING INSIDE THE CLOUD


(a) Milk is measured in




(b) Length of road is measured in



(c) Fruits are measured in



(d) Ribbon are measured in



(e) Packet of chips are measured in

